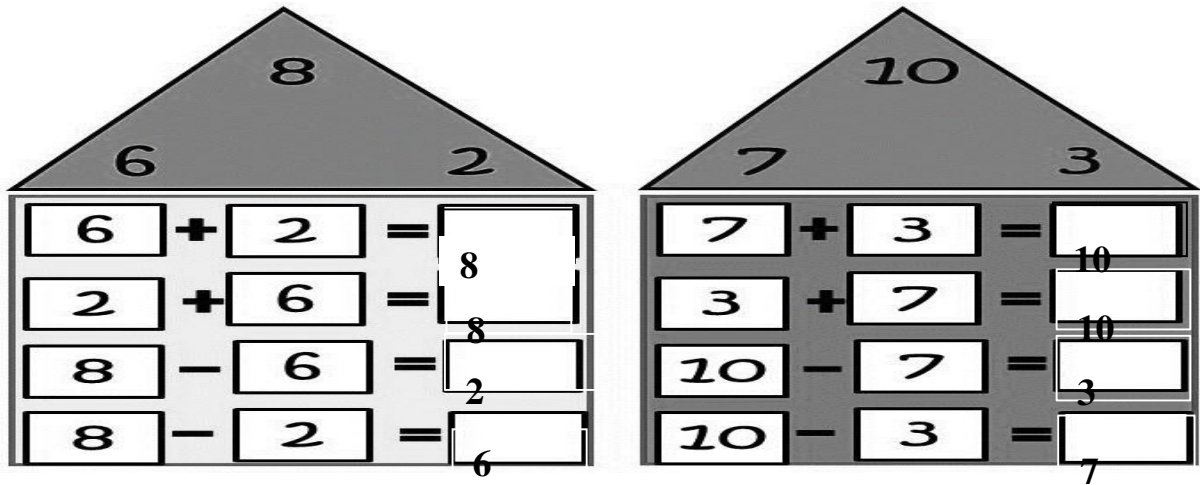


## CH - 4 MORE ADDITION AND SUBTRACTION

### 4.1 FACT FAMILIES:



### 4.2 NUMBER STORIES FOR ADDITION AND SUBTRACTION:

3 elephants are bathing in a river. 5 more elephants join them. How many elephants are bathing now?

$$3 + 5 = 8$$

2. There were 7 birds sitting on a tree. 3 of them fly away. How many birds are left on the tree?

$$7 - 3 = 4$$

## WORKSHEET – 1

### { FACT FAMILIES }

#### NUMBER STORIES OF ADDITION AND SUBTRACTION :

1. Tom has 4 cricket balls and 6 basket ball. How many marbles does he have altogether?

**Cricket balls = 4**

**Basket ball = 6**

**Altogether  $4 + 6 = 10$**

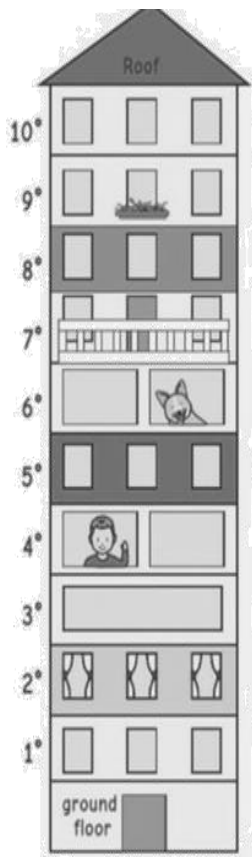
2. I have 9 bananas. I ate 6 bananas. How many bananas are left?

**$9 - 6 = 3$**

### CH - 5. ORDINAL NUMBERS







#### WORKSHEET -1

**I. COMPLETE THE SENTENCES WITH THE CORRECT ORDINAL NUMBERS.**



1. There is a balcony on the Fourth floor.  
There is a dog on the Sixth floor.
2. There is only one window in third floor.
3. There are flowers on the ninth floor.
4. There is a boy on the fourth floor.
5. The First floor is under the second floor.
6. The tenth floor is under the roof.
7. There are curtains on the second floor.
8. The curtains are on the fifth floor.

**II. MATCH THE CORRECT ORDINAL NUMBERS :**



**THIRD**

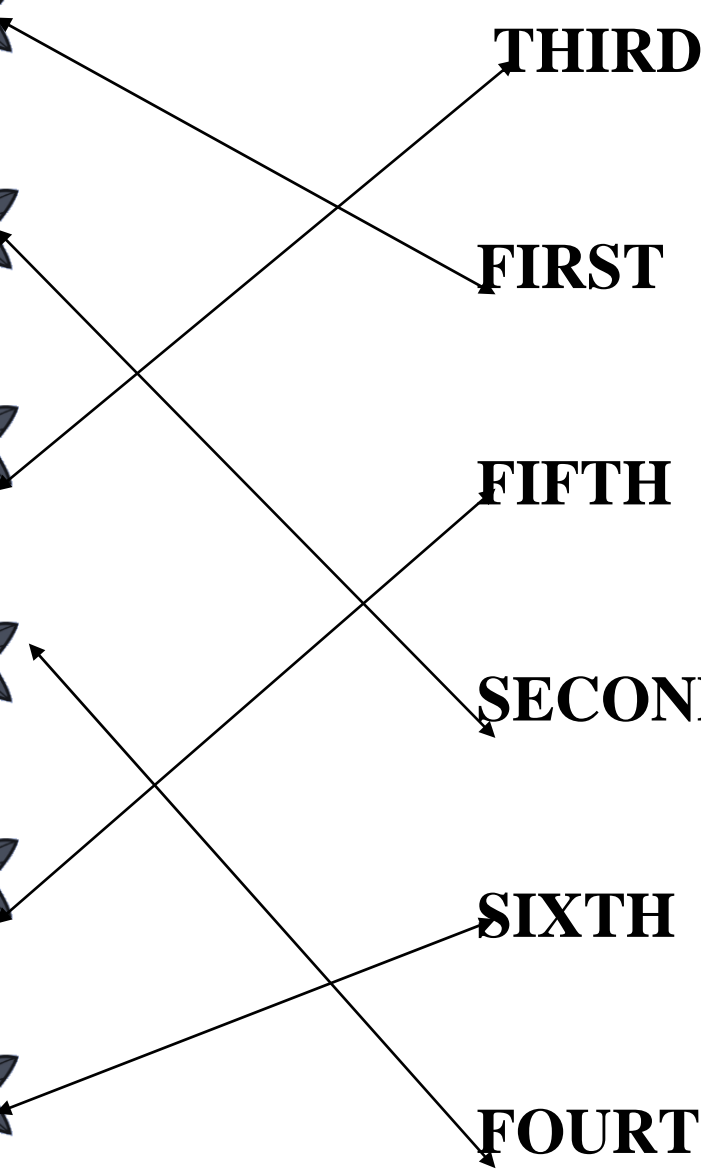
**FIRST**

**FIFTH**

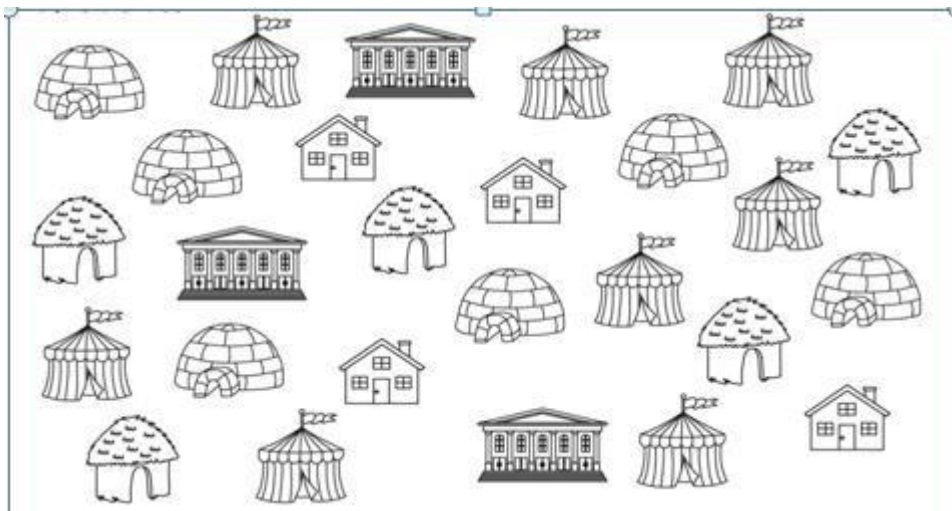
**SECOND**


**SIXTH**


**FOURTH**





# CH- 6 DATA HANDLING




1  ○ ○ ○ ○

2  ○ ○ ○ ○ ○ ○ ○ ○

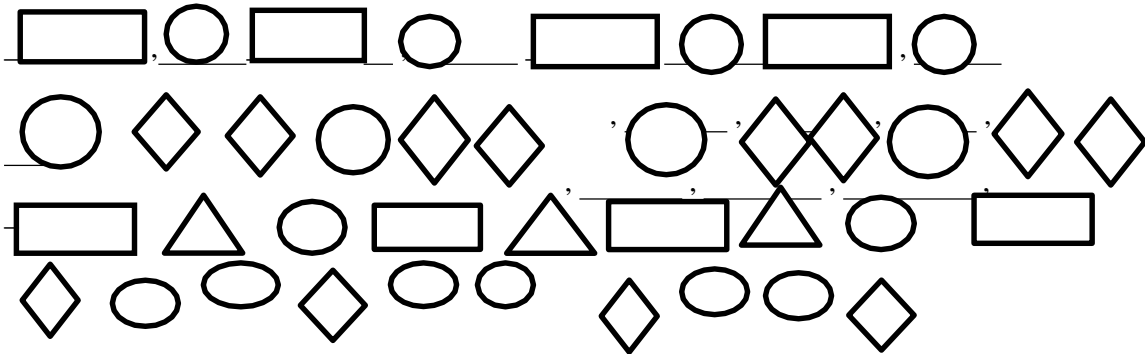
3  ○ ○ ○ ○ ○

4  ○ ○ ○ ○ ○ ○

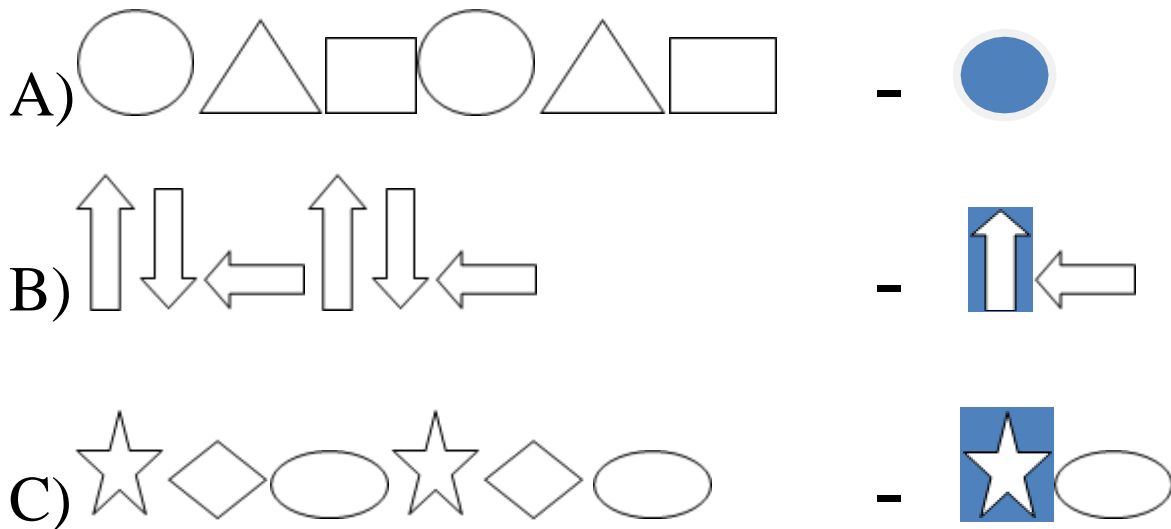
5  ○ ○ ○

## CH - 7. PATTERNS

### I. COMPLETE THE REPEATED PATTERN:



### II. COLOUR THE PICTURE THAT CONTINUES THE PATTERN:



**CHAPTER 8**  
**NUMBERS UPTO 20**

**Find out how many Tens and Ones are there:**

15 – 1 ten and 5 ones

12 – 1 ten and 2 ones

**ORDERING OF NUMBERS:**

**I. CIRCLE THE BIGGER NUMBERS:**

- |       |       |       |
|-------|-------|-------|
| a) 19 | b) 17 | c) 19 |
| d) 11 | e) 19 | f) 12 |
| g) 13 | h) 3  | i) 20 |

**II. CIRCLE THE SMALLER NUMBERS:**

- |       |       |       |
|-------|-------|-------|
| a) 11 | b) 12 | c) 13 |
| d) 17 | e) 9  | f) 1  |
| g) 3  | h) 19 | i) 5  |

**COMPARING NUMBERS USING THE SYMBOLS:**

- |              |              |
|--------------|--------------|
| a) $11 < 17$ | b) $16 = 16$ |
| c) $20 > 19$ | d) $14 > 12$ |
| e) $16 > 13$ | f) $17 > 15$ |
| g) $12 < 18$ | h) $10 < 11$ |
| i) $15 > 14$ | j) $16 < 20$ |
| k) $14 > 4$  | l) $5 < 15$  |
| m) $20 > 10$ | n) $19 = 19$ |