

Carmel International School, Hosur

Grade:2

Sub: Maths

I. WRITE THE NUMBERS INTO NUMBER NAMES:

1) 145 – _____

2) 228 – _____

3) 453 – _____

4) 769 – _____

5) 197 – _____

II. WRITE THE NUMBERS FOR THE FOLLOWING :

1) FOUR HUNDRED AND THIRTY TWO – _____

2) SEVEN HUNDRED AND SIXTY EIGHT – _____

3) FIVE HUNDRED AND FIVE – _____

4) FIFTY EIGHT – _____

5) ONE HUNDRED AND SEVENTY NINE – _____

III. WRITE THE NEXT ODD NUMBER :

1) 36 _____

2) 67 _____

3) 45 _____

4) 72 _____

5) 99 _____

IV. WRITE THE NEXT EVEN NUMBERS:

1) 48 _____

2) 76 _____

3) 92 _____

4) 24 _____

5) 18 _____

V.COMplete THE NUMBER PATTERN USING SKIP COUNTS:

- 1) 12,15,_____,_____,_____ (SKIP COUNT IN 3'S)
- 2) 25,27,_____,_____,_____ (SKIP COUNT IN 2'S)
- 3) 24,28,_____,_____,_____ (SKIP COUNT IN 4'S)
- 4) 45,50,_____,_____,_____ (SKIP COUNT IN 5'S)
- 5) 30,40,_____,_____,_____ (SKIP COUNT IN 10'S)

VI.MAKE THE SMALLEST TWO DIGIT NUMBER USING THE DIGITS ONLY ONCE:

- 1) 5,6 _____
- 2) 8,3 _____
- 3) 9,2 _____
- 4) 1,6 _____
- 5) 4,5 _____

VII.WRITE THE NUMBERS IN EXAPNDED FORM:

- 1) 654 - _____ + _____ + _____
- 2) 743 - _____ + _____ + _____
- 3) 844 - _____ + _____ + _____
- 4) 109 - _____ + _____ + _____
- 5) 278 - _____ + _____ + _____

VIII.WRITE THE MISSING NUMBERS WITH REGROUPING:

- 1) $70+12 = \underline{\quad\quad} + 2$
- 2) $30+11=40+\underline{\quad\quad}$
- 3) 6 TENS + 32 ONES = 9 TENS + _____ ONES
- 4) $50+19 + \underline{\quad\quad} + 9$
- 5) 5 TENS +17 ONES = _____ TENS + 7 ONES

IX.COMPARE THE NUMBERS USING <,>,$=$:

- 1) 567 _____ 843
- 2) 346 _____ 125
- 3) 102 _____ 842
- 4) 493 _____ 493
- 5) 932 _____ 733

X.WRITE THE NUMBERS IN ASCENDING ORDER:

- 1) 845,203,943,234 _____, _____, _____, _____
- 2) 823,573,923,736 _____, _____, _____, _____
- 3) 231,722,489,234 _____, _____, _____, _____
- 4) 895,248,973,462 _____, _____, _____, _____
- 5) 248,391,293,493 _____, _____, _____, _____

XI.WRITE THE NUMBERS IN DESCENDING ORDER:

- 1) 845,203,943,234 _____, _____, _____, _____
- 2) 823,573,923,736 _____, _____, _____, _____
- 3) 231,722,489,234 _____, _____, _____, _____
- 4) 895,248,973,462 _____, _____, _____, _____
- 5) 248,391,293,493 _____, _____, _____, _____

XII.ADD THE GIVEN NUMBERS:

- | | | | | |
|---------|---------|---------|---------|---------|
| 1) 34 + | 2) 72 + | 3) 54 + | 4) 23 + | 5) 74 + |
| 53 | 33 | 41 | 17 | 31 |
| _____ | _____ | _____ | _____ | _____ |
| _____ | _____ | _____ | _____ | _____ |

XIII.SUBTRACT THE GIVEN NUMBERS:

- | | | | | |
|---------|---------|---------|---------|---------|
| 1) 54 - | 2) 72 - | 3) 54 - | 4) 83 - | 5) 74 - |
|---------|---------|---------|---------|---------|

33

38










46

17

35

XIV. WRITE THE TIME IN THE CLOCK GIVEN :

What time is it?

		
<input type="text"/>	<input type="text"/>	<input type="text"/>
		
<input type="text"/>	<input type="text"/>	<input type="text"/>
		
<input type="text"/>	<input type="text"/>	<input type="text"/>

XV. DRAW THE TIME ON THE CLCK FACES:



1:00



3:00




4:00



2:00



12:00



6:00

XVI. WRITE THE DAYS OF THE WEEK:

XVII. WRITE THE MONTHS OF THE YEAR:

XVIII. PROBLEMS ON ADDITION AND SUBTRACTION:

1) Sam grew 125 cantelopes and 139 pumpkins. Dan grew 110 cantelopes.

How many cantelopes did they grow in all?

2) Sara picked 106 pears and Sam picked 134 pears. Tom picked

117 pears. How many pears were picked in total?

3) Sandy found 225 seashells on the beach. She gave 119 of the seashells to Fred.

How many seashells does Sandy now have?

4) Mary's high school played 823 baseball games this year. She attended 481 games. How many baseball games did Mary miss?