
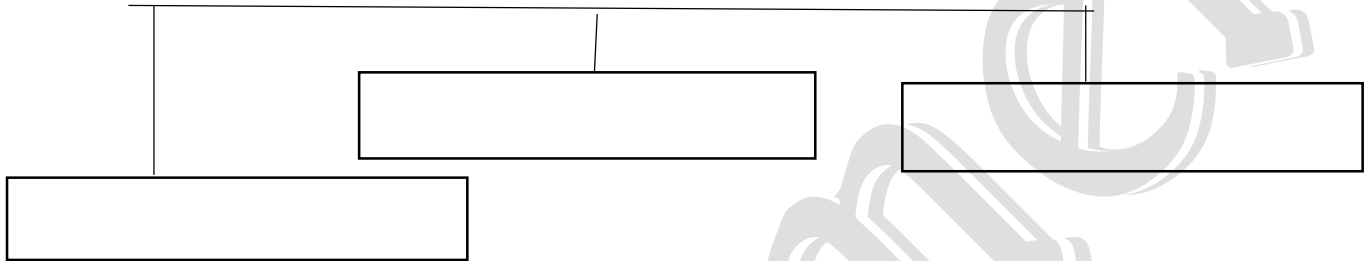


I. History is broadly divided into



II. After invention of writing,

History is divided into



III. History tells us about

- a. _____
- b. _____
- c. _____
- d. _____
- e. _____

IV. Periods in Indian History:

Periods	Beginning	Ending
Ancient		
	Delhi Sultanate	
		Recent times

V. Write two names of:

1. Warriors and rulers - _____

2. Great thinkers - _____

3. Leaders - _____

4. People who served humanity - _____

5. Monuments - _____

6. Artefacts - _____

7. Religious texts - _____

8. Epics - _____

9. Foreign travellers - _____

10. Chinese travellers - _____

11. Public property - _____

12. Private property - _____

13. Planets that rotate from east to west- _____

14. Planets that rotate from west to east- _____

Worksheet – 2

I. Answer the following:

1. Who is a historian?

2. Who is an archaeologist?

3. What do you learn in History?

4. What do you learn in Civics?

5. What is election?

6. What is Civic sense?

7. Name a lunar calendar? (used by muslims) _____

8. Nearly how many years did British rule over India? _____

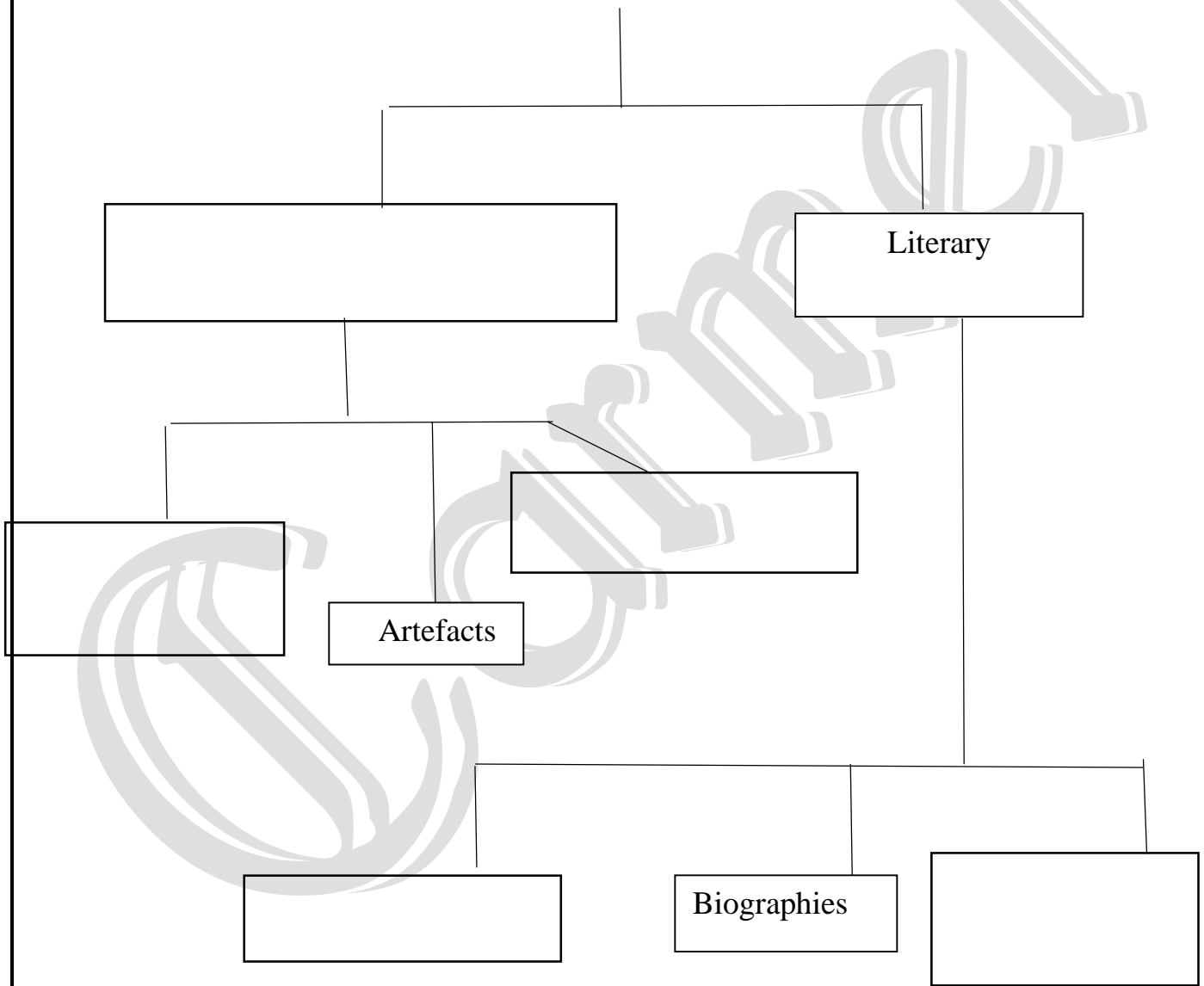
II. Time line:

_____ Birth of Jesus _____

III. Write the full form of:

- 1. CE - _____
- 2. BCE - _____
- 3. AD - _____
- 4. BC - _____
- 5. EPIC - _____

Sources of History



Worksheet – 3

I. Fill in the blanks:

1. Earth revolves around the sun in a fixed _____ (shape) path called _____.
2. Average speed of the earth's revolution is about _____.
3. Equator divides the earth into _____ and _____.
4. Every fourth year the extra day is added to the month of _____.
5. Crust is made up of _____, _____, outer layer of the earth.
6. Inner core is _____ (solid/ liquid) and _____ (hot/cold)
7. Outer core is _____ (semi liquid/ solid) _____ (hot/cold)
8. Presence of atmosphere helps us to _____ to each other (air carries sound waves).
9. Biosphere will include lithosphere, _____ and _____.
10. The word map comes from _____ word _____ meaning _____.
11. Physical map shows _____ and _____
12. Political map talks about the _____ and _____ of a country or a state.

II. Complete the table:

1.

	Definition	Time taken for 1 round	What does it cause
Rotation			Day and Night
Revolution		365 days and 6 hours	

2. Domains of the earth:[4]

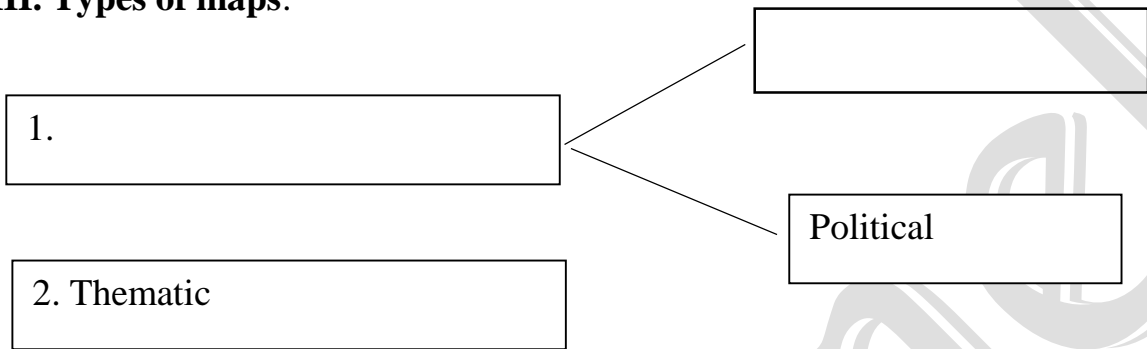
3. Layers of the earth:[4]

4. Stages of the water cycle:[4]

5. Layers of Atmosphere:[5]

6. Elements in Atmosphere:[7]

III. Types of maps:



IV. Draw a neat sketch of 8 directions:

V. Colours and symbols: [colour the box or draw the symbol in the box]


Plains	<input type="text"/>	Plateaux	<input type="text"/>
Mountains	<input type="text"/>	Road	<input type="text"/>
Deserts	<input type="text"/>	City	<input type="text"/>
Waterbodies	<input type="text"/>	Rail road	<input type="text"/>

VI. Picture based questions:



Name of the monument: _____

Who built it? _____
What does it tell us? _____



Name of the monument: _____

What information do you get from it? _____



Which is the oldest form of writing in ancient Egypt?

To which sources of history does it belong to?

2020

January	February	March	April
su mo tu we th fr sa 1 2 3 4 5 6 7 8 9 10 11 12 13 14 15 16 17 18 19 20 21 22 23 24 25 26 27 28 29 30 31	su mo tu we th fr sa 1 2 3 4 5 6 7 8 9 10 11 12 13 14 15 16 17 18 19 20 21 22 23 24 25 26 27 28 29	su mo tu we th fr sa 1 2 3 4 5 6 7 8 9 10 11 12 13 14 15 16 17 18 19 20 21 22 23 24 25 26 27 28 29 30 31	su mo tu we th fr sa 1 2 3 4 5 6 7 8 9 10 11 12 13 14 15 16 17 18 19 20 21 22 23 24 25 26 27 28 29 30
May	June	July	August
su mo tu we th fr sa 1 2 3 4 5 6 7 8 9 10 11 12 13 14 15 16 17 18 19 20 21 22 23 24 25 26 27 28 29 30 31	su mo tu we th fr sa 1 2 3 4 5 6 7 8 9 10 11 12 13 14 15 16 17 18 19 20 21 22 23 24 25 26 27 28 29 30	su mo tu we th fr sa 1 2 3 4 5 6 7 8 9 10 11 12 13 14 15 16 17 18 19 20 21 22 23 24 25 26 27 28 29 30 31	su mo tu we th fr sa 1 2 3 4 5 6 7 8 9 10 11 12 13 14 15 16 17 18 19 20 21 22 23 24 25 26 27 28 29 30 31
September	October	November	December
su mo tu we th fr sa 1 2 3 4 5 6 7 8 9 10 11 12 13 14 15 16 17 18 19 20 21 22 23 24 25 26 27 28 29 30	su mo tu we th fr sa 1 2 3 4 5 6 7 8 9 10 11 12 13 14 15 16 17 18 19 20 21 22 23 24 25 26 27 28 29 30 31	su mo tu we th fr sa 1 2 3 4 5 6 7 8 9 10 11 12 13 14 15 16 17 18 19 20 21 22 23 24 25 26 27 28 29 30	su mo tu we th fr sa 1 2 3 4 5 6 7 8 9 10 11 12 13 14 15 16 17 18 19 20 21 22 23 24 25 26 27 28 29 30 31

What calendar is it?

To which year does this calendar belong to?

Which year in saka calendar is this? (Gregorian calendar – 78 = saka calendar)

© 2020