

Grade: KG-II
Subject: Maths

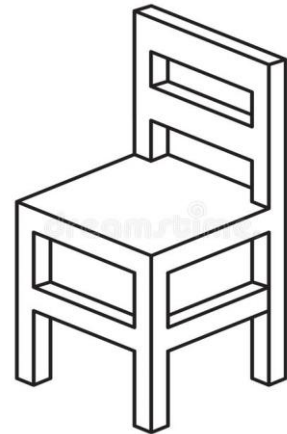
Worksheet-1

Name: _____



I. Write the numbers from 51 to 100

51		71		91
	65			
60			90	

II. Tick the LIGHT object :



III. Circle the HEAVY object :



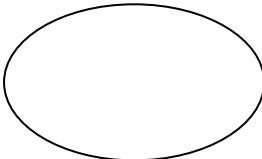
Grade: KG-II
Subject: Maths

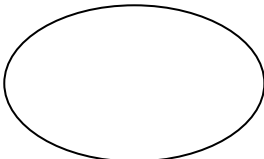
Name: _____

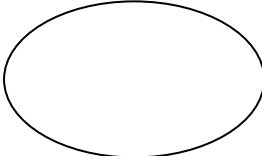
I. Fill in the missing numbers :

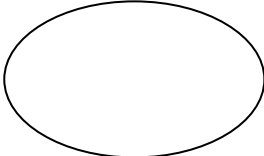
11			14		

II. What comes before ?

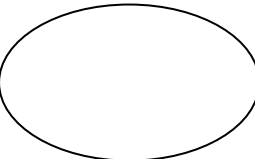
a.  14

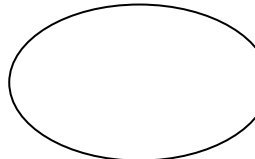
c.  8

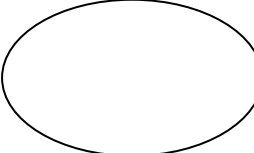
b.  20

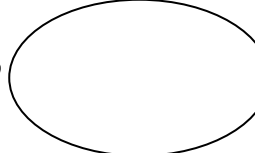
d.  10

III. What comes after ?

a. 15 

b. 17 

c. 9 

d. 13 

IV. What comes between ?

a. 16 _____ 18

b. 14 _____ 16

c. 18 _____ 20

d. 2 _____ 4

e. 7 _____ 9

V. Write the number names for the given numbers :

a. 5 _____

b. 4 _____

c. 3 _____

d. 2 _____

e. 1 _____